



DELHI PUBLIC SCHOOL RAMPURHAT

MID-TERM EXAMINATION

SESSION: 2024-2025

SUBJECT: ENGLISH

CLASS – I

Name: _____ Sec: _____ Roll No: _____

Invigilator's Sign:

Examiner's Sign:

Time Allowed: 2 Hrs 15 Mins

Max. Marks: 50

General Instructions:

- (i) First 15 minutes are allowed only for reading the question paper. Students must NOT start writing during this time.
- (ii) This question paper consists of 4 printed pages.

Section A (Handwriting) contains 5 marks

Section B (Grammar) contains 25marks

Section C (Literature) contains 20 marks

SECTION A (HANDWRITING)

A. Read the passage and copy down the same with good handwriting in the given space below. (5)

My name is Nalini. Shreya is my friend. We both study in Class 1. She is tall. She has long hair. She likes to paint. She is a very good singer too! We share our lunch and play together. After school, we go home together. We always tell each other everything. She is my best friend in the world!

SECTION B (GRAMMAR)

B. Circle the Common Nouns and Underline the Proper Nouns: (1x4=4)

1. My dog Timmy likes to play with a ball.
2. I shall go to London in January.

3. Diwali is my favourite festival.
4. Please keep the book on the table.

C. Fill in the blanks with correct One/More options:

($\frac{1}{2} \times 10 = 5$)

1. One pet I have _____ (dog/dogs).
2. My mother has two _____ (bag/bags).
3. Anil has four _____ (ball/balls).
4. There are many _____ (bottle/bottles) on the table.
5. Rita ate two _____ (egg/eggs) for breakfast.
6. There is a _____ (frog/frogs) in the pond.
7. The _____ (cow/cows) are grazing in the meadow.
8. Can I have a _____ (banana/bananas) now?
9. The farm has many _____ (horse/horses).
10. Colour the hat with the red _____ (crayon/crayons).

D. Rewrite the sentence using the correct She/He words for the underlines words: ($\frac{1}{2} \times 6 = 3$)

1. My grandmother has a cat.

2. The tiger was roaring in the jungle.

3. The vixen was playing with the cubs.

4. The woman was going to the market.

5. The deer had beautiful eyes.

6. My father is proud of me.

I. Look at the pictures and fill in the blanks with Behind/On/Under/Near: (½x4=2)

1.



The boy is sitting _____ a swing.

2.



The children are sitting _____ a tree.

3.



The treehouse is _____ a river.

4.



The children are hiding _____ a tree.

J. Write the one Rhyming words for the each words given below: (½x4=2)

1. Blue- _____

3. Rat- _____

2. Dish- _____

4. Fog- _____

SECTION C (LITERATURE)

K. Complete the following sentences with the words from the texts: (1x20=20)

1. Little _____

Lost her _____.

2. The _____ found a _____.

The _____ plant grow _____ and _____

3. _____ would dig and sow. Till he made a _____

_____.

The _____ tale a long tale.

_____ had a fever.

4. Come to the _____,

There are two _____.



Marks Obtained

Delhi Public School, Rampurhat

MID -TERM EXAMINATION
SESSION: 2024-2025
SUBJECT: BENGALI (2nd Language)
CLASS – I

Time Allowed: 2 Hours 15 Mins

Max. Marks: 50

NAME :

SECTION :

ROLL NO. :

DATE :

Invigilator's Sign :

Examiner's Sign :

- (i) প্রথম 15 মিনিট শুধুমাত্র প্রশ্নপত্র পড়ার জন্য অনুমোদিত। এই সময়ে ছাত্রছাত্রীরা লেখা শুরু করবে না।
(ii) এই প্রশ্নপত্রটি চারটি মুদ্রিত পৃষ্ঠা নিয়ে গঠিত

বিভাগ ক – ব্যাকরণ

1) সঠিক উত্তরের মাথায় টিক (✓) চিহ্ন দাও।

(1×10=10)

- ক) ধ্বনির লিখিত রূপকে বলে – বর্ণ / ছবি / ব্যাকরণ।
খ) বাংলায় মৌলিক স্বরধ্বনি আছে – 14 টি / 7 টি / 20 টি।
গ) 'বই' শব্দের বহুবচন হল – বইটি / বইগুলি / বই।
ঘ) ধ্বনি – শোনা যায় / পড়া যায় / দেখা যায়।
ঙ) 'বাঘ' শব্দের লিঙ্গ পরিবর্তন করলে হবে – বাঘটি / বাঘগুলি / বাঘিনী।
চ) ধ্বনি হল – চার / দুই / এক প্রকার।
ছ) 'গাড়ি' শব্দটি - স্ত্রীলিঙ্গ / পুংলিঙ্গ / ক্লীবলিঙ্গ।
জ) 'ও' হল – যৌগিক স্বরধ্বনি / মৌলিক স্বরধ্বনি / কোনোটাই নয়।
ঝ) একজন মানে হল – একবচন / দুইবচন / বহুবচন।
ঞ) 'দশ টাকা' এটি হল - একবচন / দুইবচন / বহুবচন।

2) এককথায় উত্তর লেখো।

(1×10=10)

ক) বর্ণ কয় প্রকার ?

উত্তর :

খ) 'রাজা' শব্দটি কোন্ লিঙ্গ ?

উত্তর :

গ) 'মেঘ' শব্দটি কোন্ বচন ?

উত্তর :

ঘ) 'ফুলগুলি' শব্দের একবচন কী হবে ?

উত্তর :

ঙ) একটি যৌগিক স্বরধ্বনির উদাহরণ দাও ।

উত্তর :

চ) বচন কয় প্রকার ?

উত্তর :

ছ) 'চ' উচ্চারণ করতে কোন্ স্বরধ্বনির সাহায্য লাগে ?

উত্তর :

জ) একটি ক্লীবলিঙ্গের উদাহরণ দাও ।

উত্তর :

ঝ) একটি স্ত্রীলিঙ্গের উদাহরণ দাও ।

উত্তর :

ঞ) কোন্ ধ্বনির লিখিত বর্ণ নেই ?

উত্তর :

3) শূন্যস্থানে সঠিক উত্তরটি বসান ।

(1×5=5)

ক) 'পিতা' শব্দটি হল _____ । (পুংলিঙ্গ / স্ত্রীলিঙ্গ / উভয়লিঙ্গ)

খ) বাংলা বর্ণমালায় মোট বর্ণ আছে _____ টি । (26 / 51 / 35)

গ) 'লোকটি' শব্দটি _____ । (একবচন / দুইবচন / বহুবচন)

ঘ) 'পাখিগুলি' শব্দটি _____ । (একবচন / দুইবচন / বহুবচন)

ঙ) স্বরধ্বনির লিখিত রূপ হল _____ । (স্বরবর্ণ / ব্যঞ্জনবর্ণ / কোনোটাই নয়)

বিভাগ খ – সাহিত্য

4) বর্ণ সাজিয়ে শব্দ তৈরি করো ।

(1×10=10)

ক) লি ডা =

খ) ল ফু =

গ) ল নী =

ঘ) থ মু =

ঙ) ব জী =

চ) শি নি =

ছ) ত শী =

জ) রি গি =

ঝ) ঠি লা =

ঞ) ম ঘু =

5) ই – কার যোগে দুটি শব্দ লেখো।

(1×2=2)

উত্তর :

6) ঐ – কার যোগে দুটি শব্দ লেখো।

(1×2=2)

উত্তর :

7) উ – কার যোগে দুটি শব্দ লেখো।

(1×2=2)

উত্তর :

8) শব্দ তৈরি করো।

(2×2=4)

ক)

দী	ন
	প

খ)

কু	ল
ফু	

9) তালিকা থেকে সঠিক শব্দ বেছে নিয়ে ছবিগুলির নীচে বসাও ।
(ফুল , দীপ , শিশু , বাড়ি , হাতি)

(1×5=5)





DELHI PUBLIC SCHOOL RAMPURHAT

MID-TERM EXAMINATION

SESSION: 2024-2025

SUBJECT: HINDI

CLASS – I

Name: _____ Sec: _____ Roll No: _____

Invigilator's Sign:

Examiner's Sign:

Time Allowed: 2 Hrs 15 Mins

Max. Marks: 50

General Instructions:

- सभी प्रश्नों के उत्तर देना अनिवार्य है। लिखावट साफ सुथरी होनी चाहिए।
- इस प्रश्नों में कुल 5 पृष्ठ हैं।

(खंड-क)

(1) प्रश्नों के उत्तर लिखों:

(1X10=10)

(i) सूरज कहां से निकलता है ?

उत्तर _____

(ii) मुरगा क्या बोला ?

उत्तर _____

(iii) सूरज निकलने पर क्या होता है?

उत्तर _____

(iv) कौए ने क्या कहा?

उत्तर _____

(v) आपको सुबह कौन उठाता है?

उत्तर _____

(vi) बांसुरीवाला का नाम क्या था?

उत्तर _____

(vii) बांसुरी वाला कहा बैठा था?

उत्तर _____

(viii) चांद क्या बजाने लगा था ?

उत्तर _____

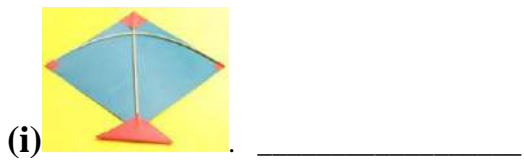
(ix) चांद झूम झूम कर क्या बजाने लगा?


उत्तर _____

(x) कांव - कांव कौन करने लगा?

उत्तर _____

(2) निम्नलिखित चित्रों को देखकर अनुस्वार, अनुनासिक और विसर्ग शब्द लिखिए: (1X10=10)





3) निम्नलिखित खाली स्थान लिखिए:

(1X5=5)

चांद गांव प्रायः प्रातः शंख

(क) _____ रात में निकलता है।

(ख) जमीला _____ में रहती है।

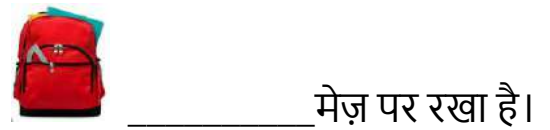
(ग) जसमीत _____ बजा रहा है।

(घ) मां _____ मंदिर जाती है।


(ङ) हमें _____ जल्दी उठना चाहिए।

(4) चित्र की सहायता से वाक्य पूरा करें:

(1X5=5)



केशव के  _____ सुंदर है।



(खंड-ख)

(5) निम्नलिखित सभी प्रश्नों के उत्तर लिखिए

(1X5=5)

(क) संज्ञा किसे कहते हैं?

उत्तर _____

(ख) संज्ञा के कितने भेद होते हैं?

उत्तर _____

(ग) लिंग किसे कहते हैं?

उत्तर _____

(ख) लिंग के कितने भेद होते हैं ?

उत्तर _____

(ग) वचन किसे कहते हैं ?

उत्तर _____

(6) खाली स्थान की पूर्ति कीजिए:

(1X5=5)

(क) शब्द के जिस रूप से संख्या का पता चलता है उसे _____ कहते हैं।

(ख) वचन के _____ रूप होते हैं।

(ग) संज्ञा के _____ भेद होते हैं।

(घ) शब्द के जिस रूप से एक वस्तु या प्राणी के होने की जानकारी मिलती है उस _____ कहते हैं।

(ङ) लिंग के _____ भेद होते हैं।

(7) निम्नलिखित वचनों को लिखिए:

(1X5=5)

एकवचन	बहुवचन
गायें	
केला	
किताब	
चूहा	
साड़ी	

(8) निम्नलिखित लिंग को लिखिए:

(1X5=5)

पुल्लिंग	स्त्रीलिंग
भाई	
अध्यापक	
मोर	
बंदर	
बालक	



DELHI PUBLIC SCHOOL RAMPURHAT

MID-TERM EXAMINATION

SESSION: 2024-2025

SUBJECT: MATHEMATICS

CLASS - I

Name: _____ Sec: _____ Roll No: _____

Invigilator's Sign:

Examiner's Sign:

Time Allowed: 2 Hrs 15 Mins

Max. Marks: 50

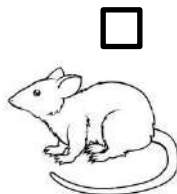

General Instructions:

- (i) First 15 minutes are allowed only for reading the question paper. Students must NOT start writing during this time.
- (ii) This question paper consists of 4 printed pages.

SECTION - A

1. Tick the shortest object -

(1m)



2. What comes before, after and between -

(1m x 3 = 3m)

- a) _____ 14 b) 18 _____ 20 c) 9 _____

3. Draw pictures to complete the pattern -

(0.5m x 2 = 1m)



4. Count and write the number of object -

(1m x 3 = 3m)

a) ☆ ☆ ☆ ☆ ☆ ☆ ☆ ☆ ☆ ☆ ☆ ☆ - _____

b) 😊 😊 😊 😊 😊 😊 😊 😊 😊 😊 😊 😊 😊 - _____

c) ⊗ ⊗ ⊗ ⊗ ⊗ ⊗ ⊗ ⊗ ⊗ ⊗ ⊗ ⊗ ⊗ ⊗ ⊗ - _____

5. Count backward and fill in the blanks -

(1mx2=2m)

16 ____ 14 ____ 12

SECTION - B

6. Expand the numbers in tens and ones -

(1mx2=2m)

T O

a) 14 - ____ ten + ____ ones

b) 20 - ____ tens + ____ ones

7. Write the number names of the following -

(1mx4=4m)

a) 17 - _____

b) 12 - _____

c) 20 - _____

d) 15 - _____

8. Put more than (>), less than (<) or equal to (=) sign -

(1mx4=4m)

a) 13 ____ 20

b) 10 ____ 10

c) 14 ____ 17


d) 15 ____ 5

9. Draw beads -

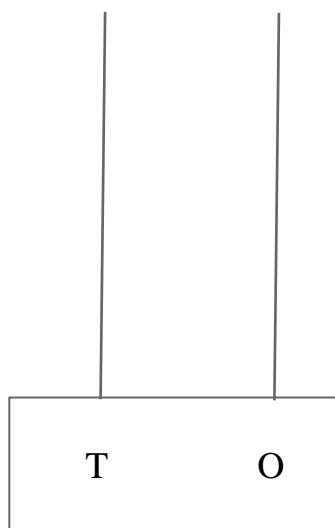
(1mx2=2m)

a)

b)



18



10

10. Add the following -

(1mx4=4m)

a) 8	b) 13	c) 7	d) 15
+ 6	+ 4	+ 2	+ 1
-----	-----	-----	-----

11. Subtract the following -

(1mx4=4m)

a) 8	b) 19	c) 17	d) 7
- 5	- 2	- 6	- 3
-----	-----	-----	-----

SECTION - C

12. Write the given numbers in -

(3m)

a) Ascending order (Small to Big) -

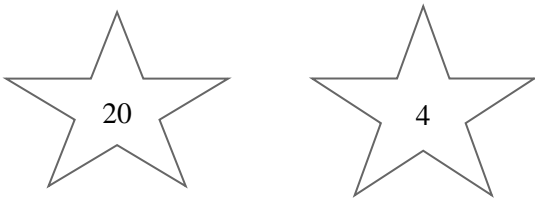
17 , 2 , 18 , 6 - _____

b) Descending order (Big to small) -

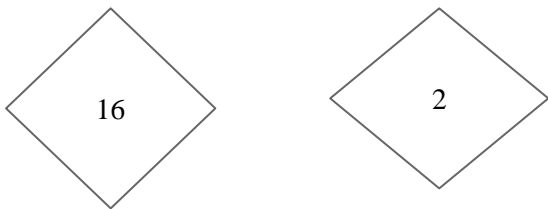
8 , 14 , 20 , 17- _____

13. a) Colour the BIGGER number -

(3m)

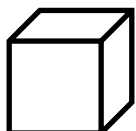
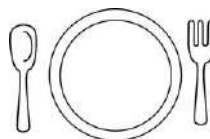




b) Colour the SMALLER number -



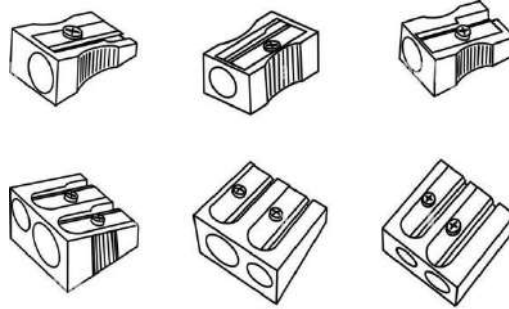
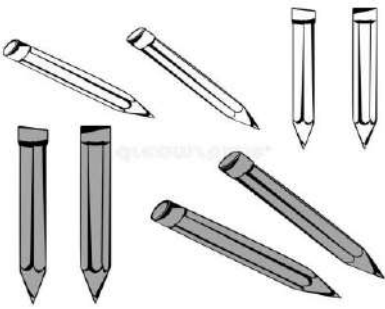
14. Match the following -

(3m)



15. Count the objects and add them -

(3m)



Pencils

Sharpeners

Pencils +

Sharpeners =

SECTION - D

14. Draw any two shapes and colour them -

(2mx2=4)



15. a) Add using the number strip -

(2m)

$$\begin{array}{r} 14 \\ + 2 \\ \hline \end{array}$$




b) Subtract using a number strip by counting backward -

(2m)

$$\begin{array}{r} 19 \\ - 4 \\ \hline \end{array}$$





DELHI PUBLIC SCHOOL RAMPURHAT

MID-TERM EXAMINATION

SESSION: 2024-2025

SUBJECT: EVS

CLASS – I

NAME:

SEC:

ROLL No:

Time Allowed: 2 Hrs 15 Min

Max. Marks: 50

Invigilator's Sign:

Examiner's Sign:

General Instructions:

(i) First 15 minutes are allowed only for reading the question paper. Students must NOT start writing during this time.

(ii) This question paper consists of 3 printed pages.

Write T for true and F for false.

(1mark × 10 questions = 10 marks)

1. A post office helps us send letters and cards.
2. We buy fruits from a post office.
3. A carpenter fixes pipes and taps.
4. We go to a market to buy things.
5. We should not help our neighbours.
6. We should respect our teachers.
7. Kutcha houses are made of cement and bricks.
8. We should not keep our neighbourhood clean.
9. Police officer protects us from thieves.
10. We go to a park when we fall sick.

<input type="checkbox"/>
<input type="checkbox"/>
<input type="checkbox"/>
<input type="checkbox"/>
<input type="checkbox"/>
<input type="checkbox"/>
<input type="checkbox"/>
<input type="checkbox"/>
<input type="checkbox"/>
<input type="checkbox"/>

Choose the correct option to fill in the blanks.

(1mark × 5 questions = 5 marks)

1. A house is called a _____ when we live with our family.
a. hotel b. hostel c. home
2. A _____ mends our shoes.
a. doctor b. nurse c. cobbler

3. School functions are held in the _____.

- a. classroom b. auditorium c. computer lab

4. A doctor works in a _____.

- a. hospital b. garden c. shop

5. We buy fruits and vegetables from a _____.

- a. post office b. greengrocer c. bank

Match the following.

(1mark × 5 questions = 5 marks)

Column A	Column B
1. Our father and mother	a. Grandparents
2. Parents of parents	b. Parents
3. Our brother and sister	c. Grandfather
4. Brother of our father	d. Siblings
5. Father of our mother	e. Uncle

Answer the following question in one word or one sentence or as per exact requirement of the question.

(2marks × 5 questions = 10 marks)

1. Who sells fruits and vegetables?

Ans. _____

2. In which room do we cook our food?

Ans. _____

3. Who stitches our clothes?

Ans. _____

4. Who makes our wooden tables and chairs?

Ans. _____

5. Where do we keep our money safely?

Ans. _____

Unscramble the letters to get the name of the helper. (2marks × 5 questions) = 10 marks

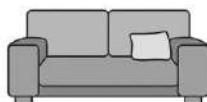
- 1. TSPMAON
- 2. TAEHCRE
- 3. BBCLREO
- 4. CTDOOR
- 5. RFMRAE

Read the questions carefully and answer them according to the instructions.

(5marks × 2 questions = 10 marks)


- 1. Name the rooms where you can find these things.





- 2. Diagrammatically represent the types of houses.

K__T__ __A HOUSE	P__C__A HOUSE



DELHI PUBLIC SCHOOL RAMPURHAT

MID-TERM EXAMINATION

SESSION: 2024-2025

SUBJECT: COMPUTER

CLASS – I

NAME-

SEC-

ROLL.NO-

Invigilator's sign:

Examiner's sign:

Time Allowed: 2Hrs 15 Mins

Max. Marks: 50

General Instructions:

- (i) First 15 minutes are allowed only for reading the question paper. Students must NOT start writing during this time.
- (ii) This question paper consists of 3 printed pages.

MULTIPLE CHOICE QUESTIONS (1 x 8 = 8)

1. Books and toys are _____.
a) Natural things b) Human made things c) None of these
2. A washing machine helps us _____ our clothes.
a) Wash b) cook c) record
3. A Computer needs _____ to work.
a) Water b) Food c) Electricity
4. Which of this can you do on a computer ?
a) Draw b) Cook c) Bath
5. A Computer can be used at a school
a) to book tickets b) to teach and learn c) to play
6. _____ is an output device.
a) Mouse b) keyboard c) Monitor
7. We should always press keyboard buttons
a) hard b) gently c) None of these
8. We should clean the computer with
a) dirty cloth b) clean & soft clean c) wet cloth

WRITE TRUE OR FALSE (1 x 6 = 6)

9. We can talk to our friends using a computer. []
10. We should pull the wires from the computer. []
11. Output devices help the computer to share information with us. []
12. The mouse is the brain of the computer. []
13. The CPU must be turned on to start the computer. []
14. A Computer can be used to book a train ticket. []

MATCH THE COLUMN (1 x 6= 6)

15. Tablet	a.Storage device
16. Memory card	b.Click on start
17.Shut down	c. Can fit in our hands
18.Natural thing	d.Keyboard
19.Monitor	e. Stars
20.Input Device	f.Watching cartoons

WRITE THE MISSING LETTERS (1 x 10 = 10)

- 21. D ___ V I C E
- 22. C O M ___ U T E ___
- 23. S W ___ T C H
- 24. M O ___ S E
- 25. S H U ___ D O ___ N
- 26. D A M ___ G E
- 27. M O N ___ T O R
- 28. H A R ___ D ___ S K
- 29. P ___ N D R I ___ E
- 30. N A ___ U R A L

ANSWER THE FOLLOWING (2 x 10 = 20)

31. Write any two activities that you can do using a computer.

Ans: _____

32. What is a machine? Give one example. (1 + 1=2)

Ans: _____

33. Rina works at a restaurant. How can a computer help her?

Ans: _____

34. Name any two storage devices used in a computer.

Ans: _____

35. What are the four main parts of the computer?.

Ans: _____

36. Guess the following (1 + 1=2)

i) The brain of the computer- _____

ii) It helps us to select an item on the computer monitor- _____

37. I am a place where a computer is used (1+ 1=2)

i) To book an airplane ticket - _____

ii) to know about patients- _____

38. Write **N** for natural thing and **H** for human made thing. (1+1=2)





39. Write **I** for Input device and **O** for output device. (1+1=2)





40. Identify the following parts of a computer. (0.5+0.5+0.5+0.5= 2)





